
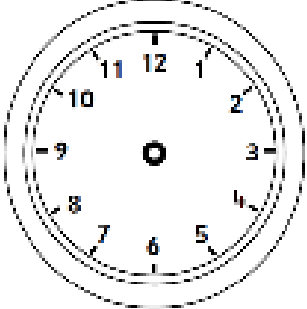

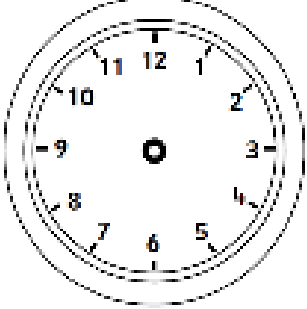

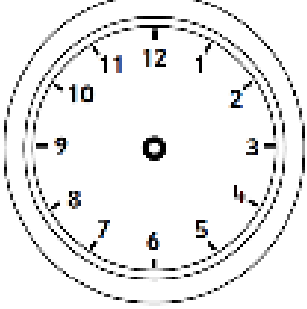

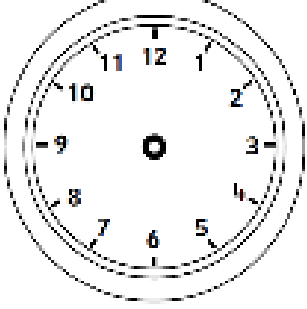


Friday 22nd May 2020

Time word problems – Sheet 2

<p>Harry leaves for football at 10 o'clock. It takes him half an hour to walk there. What time does he get there? Draw the time on the clock.</p>		
<p>Jim took his dog for a walk at 9 o'clock. He walks the dog for 2 hours. What time does Jim finish his walk? Draw the time on the clock.</p>		
<p>The Go Jetters are flying to Wadebridge! They leave at 10 o'clock. The flight takes 2 hours. What time will they get to Wadebridge? Draw the time on the clock.</p>		
<p>Mr O'Dwyer travelled to school on a tractor! He arrived at school at 11 o'clock and said it took 1 hour! What time did he leave home? Draw the time on the clock.</p>		
<p>Reception have a dress up party and start dancing at 5 o'clock. They finish half an hour later. What time do they finish dancing? Draw the time on the clock.</p>	